



Al Khozama International School, Dammam

(B. E. S. T. Schools, Saudi Arabia)

Class: 1

Worksheet- 1

Subject: English

Evaluation-3 (February 2019)

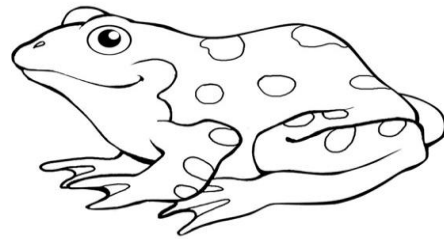
Name: _____ Class: 1 Sec: ____

Date: _____

I. Read the story and answer the questions below-

Mr.Frog

I see a frog in the pond. The frog is green. Watch out! The frog likes to jump. It jumped in the pond. You can see it swim.



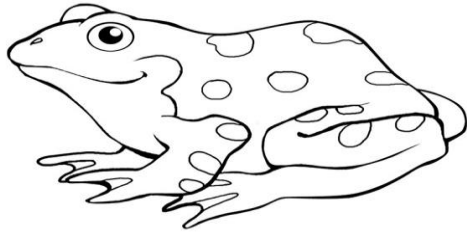
1. I see a frog in the _____

2. The frog is _____

3. The frog likes to _____

4. Where does the frog live?

5. Colour the frog.



Al Khozama International School, Dammam



Al Khozama International School, Dammam

(B. E. S. T. Schools, Saudi Arabia)

Class: 1

Worksheet


Subject: English

Evaluation-3 (February 2019)

BL- 16 & 19 Rain game, Where is Gola?

Name: _____ Class: 1 Sec: _____ Date: _____

II. Fill in the blanks with ir, ur and er words-



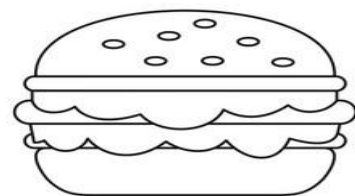
c___cle



p___se



fath___



b___ger

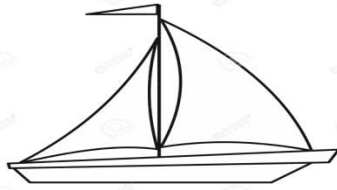
III. Make appropriate sentences with the following words-

1. shirt- _____

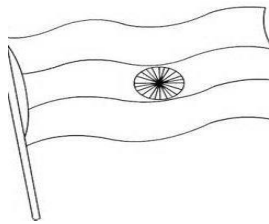
2. summer- _____

IV. Add 'a' or 'o' to each word to make a new word-

1. bot



2. flg



3. fam



V. Write the homes of the animals using the help box-

desert

burrow

pond

hole



1. The frog lives in the _____

2. The snake lives in the _____

3. The camel lives in the _____

4. The rabbit lives in the _____

VI. Fill in the blanks by answering the questions-

setting	What did Gola see here?	Did Gola like it?
 <p>forest</p>		
 <p>mountains</p>		

VII. Write 2 words each rhyme with 'blow' and 'cake'

1. blow- _____

2. cake- _____

VIII. Complete the following sentences-

hungry and thirsty way to the sea in a big tree

1. Muri showed him the _____

2. Gola was _____

3. Niki and Noni are _____

IX. Write True or False-

1. Niki likes the rain- _____

2. Noni eats three berries- _____

X. Answer the following questions-

1. What game do Niki and Noni play?

2. Which are the places Gola visited?



Al Khozama International School, Dammam

(B. E. S. T. Schools, Saudi Arabia)

Class: 1

Worksheet

Subject: English

Evaluation-3 (February 2019)

BL-15,20,24 (contractions, describing words, position words)

Name: _____ Class: 1 Sec: ____

Date: _____

I. Write the contractions for the following-

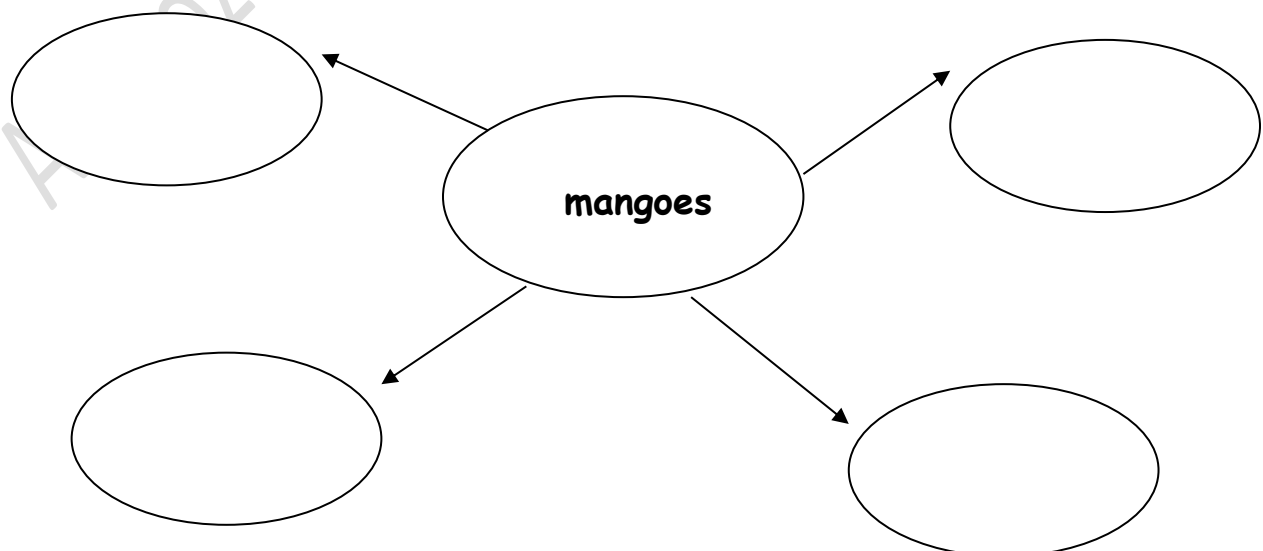
1. do not- _____

2. is not- _____


3. can not- _____

4. are not- _____


II. Write describing words for the word in the center




III. Draw your favourite thing and write 2 describing words for it.



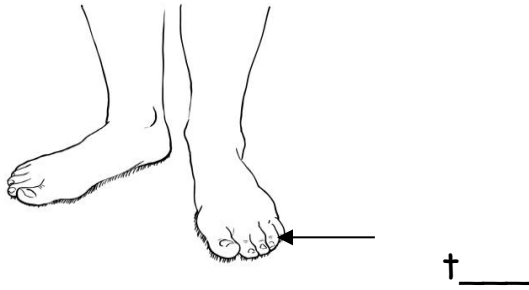
IV. Fill in the blanks with ow, oe and o_e



st__n__




__



V. Describe the picture. Use describing words using help box.

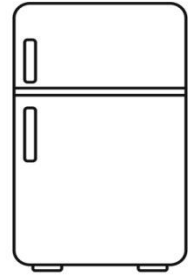
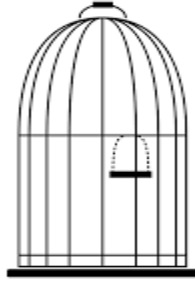
(many, new, beautiful, big,)




The shop is _____ and has _____ vegetables. The lady wears a _____
_____ dress and have a _____ hair. She is carrying a _____
bag.

VI. Write the words from the help box under the correct pictures-

fridge	stage	judge	cage
--------	-------	-------	------



VII. Draw 2 things in your room and write where they are kept.



VIII: Fill in the blanks with "in, on, under"

In your classroom,

1. The books are kept _____ the table.

2. The blackboard is _____ the wall.

3. The floor is _____ the table.

4. The charts are _____ the wall.

Al Khozama International School, Dammam



Evaluation-3 (February 2019)

I. Read the story and answer the following questions-

Musical Picnic

Lily and Mom had a picnic under a tree. Lily bit into her apple once, then again. CRUNCH, CRUNCH! "I hear the music of your apple," Mom said. Mom bit into her carrot once, then again. MUNCH, MUNCH! "I hear the music of your carrot," Lily said. "It sounds like my apple." Birds landed in the tree. RUSTLE, RUSTLE, RUSTLE. "I hear the music of birds on branches," Mom said. "I hear the music of us laughing, too," said Lily. Suddenly, Lily and Mom heard new music. "TWEET! TWEET! TWEET!" sang the birds.

Q.1 What did Mom eat in the story?

Ans.

—

Q.2. Where does this story take place?

Ans.

—

Q.3. What sound did the birds make when they landed in the tree?

Ans.

—

Q.4. If you were outside in a garden, what sounds might you hear?

Ans.

II. Fill in the blanks with the correct describing words from the help box:

beautiful	heavy	tall	sweet
-----------	-------	------	-------

1. There are _____ flowers in the garden.
2. Giraffe is a _____ animal.
3. Sugar is _____.
4. I lifted a _____ box.

III. Make meaningful sentences with the following words:

1. tiny-








2. blue-

3. crown-

4. helpful -

5. tasty -

IV. Circle the correct word for the pictures with the sounds er, ir or ur:

			
bird burd berd	skirt skurt skert	girl gurl gerl	birthday burthday berthday
			
nirse nurse nerse	rivir rivur river	dirt durt dert	

V. Write the contractions for the following-

1. is not - _____
2. are not - _____
3. did not - _____
4. does not - _____

VI. Choose and fill in the blanks with appropriate position word:

1.



The egg is _____ the nest.
(in, on, under)

2.



The girl is _____ the tree.
(in, on, under)

3.



A jug is _____ the table.
(in, on, under)

4.



A bear is _____ the jungle.
(in, on, under)

5.



Man is sitting _____ a tree.
(in, on, under)

6.



A key is _____ a lock.
(in, on, under)

VII. Write True or False-

1. Niki likes the rain. _____

2. Niki and Noni played A Train Game. _____


3. Gola likes the mountains as his home - _____

4. Gola is a camel - _____


Setting

What did Gola see here?

Did Gola like it? Wh



desert



Mountains

VIII. Complete the following table:-

IX. Complete the following sentences-

hungry and thirsty	in a big tree	berries, grapes
and bananas	way to the sea	some real
food		

1. Niki and Noni are hiding

2. Niki wants to eat

3. Gola

was _____

4. Muri showed him the

5. Noni is searching for

X. Answer the following questions-

1. What game do Niki and Noni play?

2. Were Niki and Noni eating the real fruits?

3. Name any 3 settings Gola visited in the story.

Al Khozama International School, Dammam



Al Khozama International School, Dammam

(B. E. S. T. Schools, Saudi Arabia)

Class: 1

Worksheet

Subject: EVS

Evaluation-3 (February 2019)

I. Choose the correct option.

- An auto rickshaw has _____ wheels.
a. four b. three c. six
- Rocket is a _____ transport.
a. air b. water c. land
- We use _____ to travel outside the city or country.
a. aero plane b. car c. bike

II. Fill in the blanks.



- We need _____ to drink.
- _____ are used for traveling under water in sea and ocean.
- We use water for _____ clothes.
- _____ needs water to grow.
- We use vehicles to _____ goods and people from one place to another.

III. Write true or false for the following

- Boat and ship have no wheels.
- We should waste water.
- Water is very useful.
- We use truck to carry goods.

()
()
()
()

IV. Identify the picture.



V. Answer the following.

1. Name two land and water transport.

Ans:

1. Why do plants need water?

Ans:

1. Name two animals that live in water.

Ans:

VI. Draw, colour and write two uses of water.

--	--



Evaluation-3 (February 2019)

I. Choose the correct option.

- _____ is used to make raincoats.
a. cotton b. plastic c. wool
- We need air to _____ .
a. see b. eat c. breathe
- We use _____ when it rains.
a. umbrella b. shirt c. sweater
- A rainbow has _____ colours.
a. five b. seven c. six


II. Fill in the blanks.

- _____ needs air to burn.
- _____ sleeps during winter season.
- Air is used to make _____.
- Air is _____.
- Air occupies _____.

III. Write true or false for the following

- We can see air. ()
- We wear cotton clothes in winter. ()
- Gum boots are used in summer. ()
- Water has air in it. ()

IV. Identify the picture.



V. Answer the following.

1. Name the five seasons of the year.

Ans: _____

1. How are weather and seasons different from each other?

Ans:	
------	--

VI. Draw, colour a rainbow.

--



Al Khozama International School, Dammam

(B. E. S. T. Schools, Saudi Arabia)

Class: 1

Worksheet-Overall

Subject: EVS

Evaluation-3 (February 2019)

I. Fill in the blanks

(rainy , air , vehicles , water , rainbow)

1. We use _____ to transport goods and people.
2. Animals use _____ to clean themselves.
3. _____ is used for burning.
4. We can see a _____ just after the rain stops.
5. We carry umbrellas during the _____ season.

II. Write true or false:

1. It is cold during the summer season- _____
2. There are seven colors in a rainbow- _____
3. Animals need air to breathe- _____

III. Answer the following.

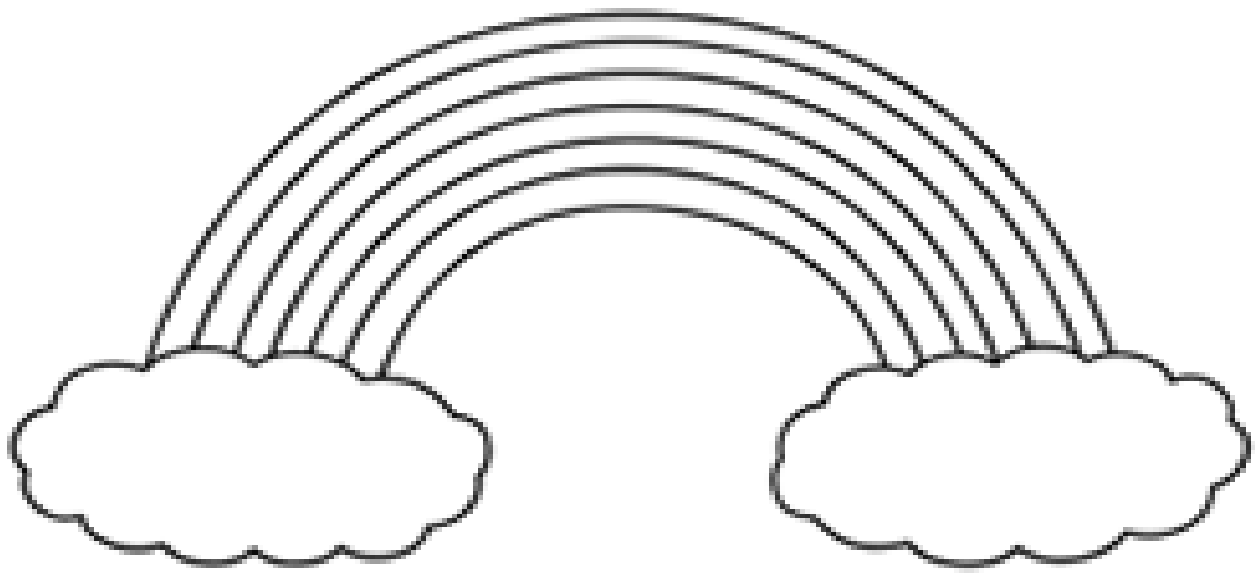
1. How do dams help in making water available for later use?

2. Write three ways to save water?

3. How does the plant feel after it rains?

IV. Write the 7 colours of the rainbow and colour the rainbow:

1. _____ 2. _____ 3. _____
4. _____ 5. _____ 6. _____
7. _____





Al Khozama International School, Dammam

(B. E. S. T. Schools, Saudi Arabia)

Class: 1

Worksheet-1




Subject: EVS

Evaluation-3 (February 2019)

IV. Write True or False.

6. There are three modes of transport- _____
7. Boats and ships are air transport- _____
8. Auto-rickshaws have three wheels- _____

V. Complete the table. (car , helicopter , ship)


Vehicle	Name of the vehicle	Mode of travel
		
		
		

VI. Answer the following.

3. Write two things that we will not be able to do without vehicles?

4. Which mode of transportation is the fastest and why?

IV. Look at the vehicles given below and name them.



A. How are they same?

B. How are they different?



Al Khozama International School, Dammam

(B. E. S. T. Schools, Saudi Arabia)

Class: 1

Worksheet-2

Subject: EVS

Evaluation-3 (February 2019)

VII. Write True or False.

1. We need water for drinking - _____
2. Water is very valuable - _____
3. Animals do not need water to live - _____

VIII. Answer the following:

1. Write 2 uses of water outside the house.

2. Write 2 ways in which we use water at home.

IX. Draw how a plant will look after a week if you forget to water it.

A large empty rectangular box with a black border, intended for a drawing of a plant that has wilted due to lack of water.

Subject: EVS
Block 21- We need air
REVISION WORKSHEET

I. Fill in the blanks

Space	water	everywhere	fire
-------	-------	------------	------

1. Air is _____.
2. _____ needs air to burn.
3. Air takes up _____.

II. Look at the picture. What does it tell you about air?



III. Answer the following questions.

1. Write 2 uses of air.

2. What will happen if we put a glass over a burning candle? Why?

I. Complete the sentences:

A. On a rainy day I can hear _____.

B. On a rainy day I can see _____.

II. Answer the following:

1. How does the air feel after it rains?

2. What material are raincoats made of and why?

III. Write two things that you use when it rains. Write the names of the things.



AL KHOZAMA INTERNATIONAL SCHOOL, DAMMAM

Affiliated to CBSE – New Delhi

Subject: EVS- Block_24- Weather and Seasons

REVISION WORKSHEET

I. True or False:





1. Weather and seasons are the same- _____
2. During summers the days are hot- _____
3. We wear warm clothes during winter- _____

II. Answer the following:

1. Name the five seasons of the year.

2. Write two changes that you see at home when the winter season begins.

III. Use the weather chart to answer the questions.

Sunday 2 Feb 2019	Monday 2 Feb 2019	Tuesday 3 Feb 2019	Wednesday 4 Feb 2019
			

- A. Which two days had the same weather? How was the weather?**

- B. How was the weather on Tuesday?**

--	--	--	--	--	--

III: Write which of the following activities will take more time and less time

1. Eating food - _____
2. Sleeping at night - _____
3. Coming to school - _____
4. Coming from India to Saudi Arabia - _____

IV : Put the activities in the order in which they are done

a)	Wearing uniform	
b)	Brushing teeth	
c)	Getting up in the morning	


V: Complete the following:

1. March, _____, May, _____,

2. Tuesday, _____, _____,

Friday

3. 2, 4, 6, _____, _____, _____

4.  _____

Solve:

1.) Two birds were sitting on the fence. 4 more birds joined them. How many birds are sitting on the fence altogether?

2) You have 9 pieces of candies. You gave 3 candies to your sister. How many candies are left with you now?

3) Write a story problem with 6, 4, and 2

Al Khozama International School, Dammam



Al Khozama International School, Dammam

(B. E. S. T. Schools, Saudi Arabia)

Class: 1

Worksheet


Subject: Math (15,20)

Evaluation-3 (February 2019)

I. Fill in the blanks.

1. $5 + 3 =$ _____


2. $15 - 5 =$ _____

3.  = _____

4. $3 + 4 + 1 =$ _____

5. $20 - 10 =$ _____

II. Match the following.

Altogether	
5	sort things
left	add
data	subtract

III. Write the missing numbers

1. 10, 20, 30, 40, 50, _____, _____.

2. 2, _____, 6, _____, _____, 12

3. 5, _____, 15, _____, _____, 30

IV. Solve the following:

18 birds in all	
5 birds flew away	

1.

_____ birds are left.

2. Write a story problem using the numbers — 5, 3, and 2

3. Raju had 7 cookies. He ate 2 cookies. How many cookies are left with Raju now?



Al Khozama International School, Dammam

(B. E. S. T. Schools, Saudi Arabia)

Class: 1

Worksheet

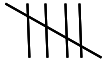
Subject: Math - 22

Evaluation-3 (February 2019)

III. Fill in the blanks.

6. $5 + 3 =$ _____


7. $15 - 5 =$ _____

8.  = _____

9. $3 + 4 + 4 =$ _____

10. $20 - 10 =$ _____

IV. Match the following.


Altogether	
5	sort thing
	add
data	subtract

SECTION-B

I. Do as directed

3(2mark)

1. Write the missing days of the week.



2. Write the missing number.



3. Use ☺ and ♥ to make a pattern like.


A	B	A	B	A	B	A	B

SECTION C

**I. Do as directed
(3 mark)**

3(3)

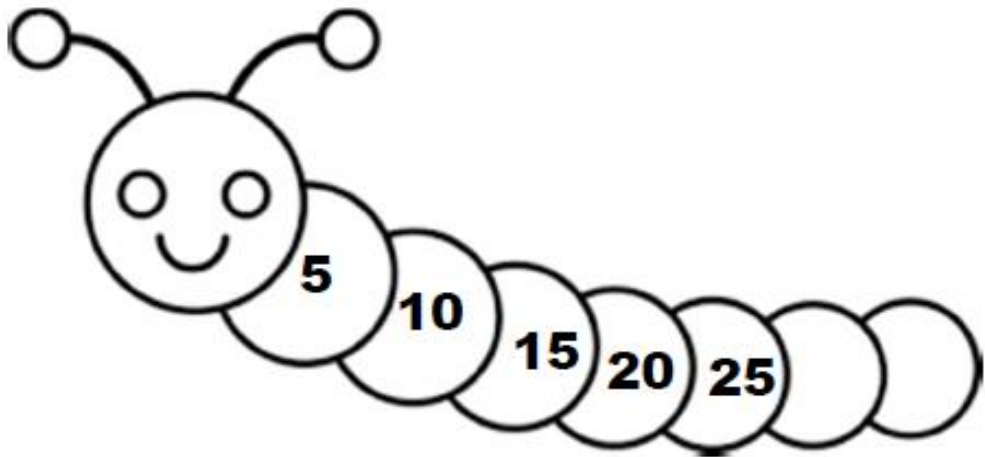
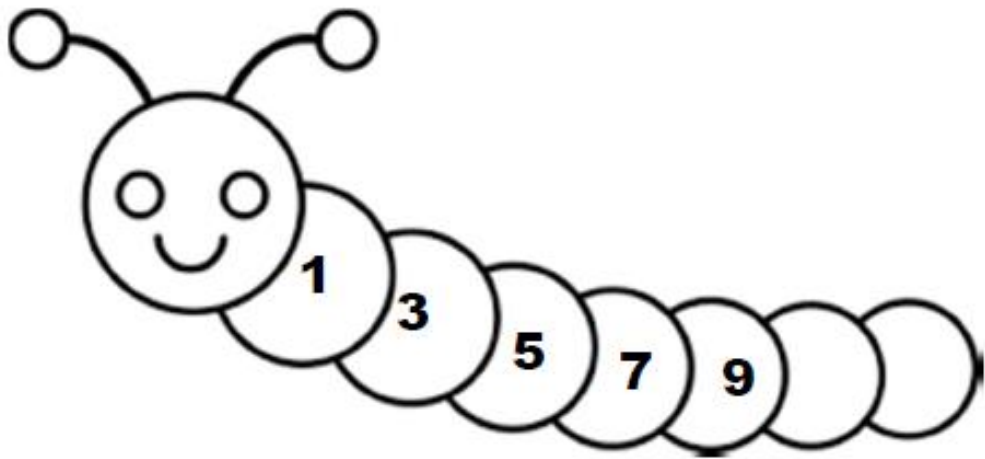
1. Color all the triangles with red, rectangles with blue and squares with yellow.



2. Put the activities in the order in which they are done.

a)	Dinner	
b)	Lunch	
c)	Breakfast	

3. Write the numbers to finish the pattern.



Al Khozama International



Al Khozama International School, Dammam

(B. E. S. T. Schools, Saudi Arabia)

Class: 1

Worksheet 23,24

Subject: Math

Evaluation-3 (February 2019)

I Fill in the blanks:

3. Complete the pattern: ○ ○ △ ○ ○ △ _____

a) ○ △ ○ △

b) ○ ○ △

4. There are _____ months in a year.

a) 7

b) 12

5. The day after Sunday is _____.

a) Monday

b) Saturday

6. If this month is February, the next month will be _____.



a) January

b) March

7. We eat breakfast in the _____.

a) morning

b) evening

II: Use  as A and  as B and complete the below pattern.

A	A	B	B	A	A	B	B

III: Write which of the following activities will take more time and less time

- 5. Brushing teeth - _____
- 6. Washing clothes - _____
- 7. Sleeping at night - _____
- 8. Cooking your favourite dish - _____
- 9. Going to India - _____

IV : Put the activities in the order in which they are done

a)	Ironing Clothes	
b)	Washing Clothes	
c)	Drying Clothes	

V: Complete the following:

5. March, _____, May, _____,

6. Tuesday, _____, _____,

Friday



Al Khozama International School, Dammam

(B. E. S. T. Schools, Saudi Arabia)

Class: 1

Worksheet

Subject: Math

Evaluation-3 (February 2019)

I. Write the number names

1.

75 - _____

2.

12 - _____

3.

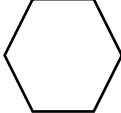
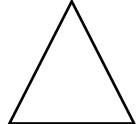


48 - _____

4.

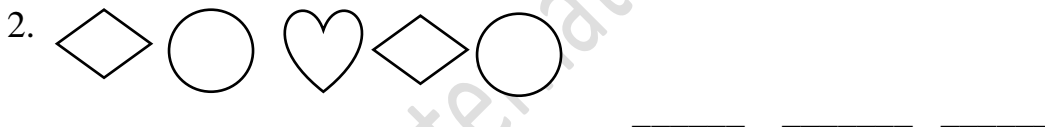
39 - _____

II. Write a story problem to show 16-4?

III. Complete the table .

Sr.No	Shape	Number of Sides	Number of Corners
1			
2			
3			
4			

IV. Draw next three shapes .



V.Solve the following:

a) $12-4 =$

b) $10-2 =$

c) $10+9 =$

d) $15-5 =$

e) $6+7 =$

f) $11+6 =$



Al Khozama International School, Dammam

(B. E. S. T. Schools, Saudi Arabia)

Class: 1

Worksheet

Subject: Math


Evaluation-3 (February 2019)

I. Write the missing numbers.

62		64			67		69
----	--	----	--	--	----	--	----

II. Solve the problem.

There are 10 birds. 5 more birds came. How many birds in all?

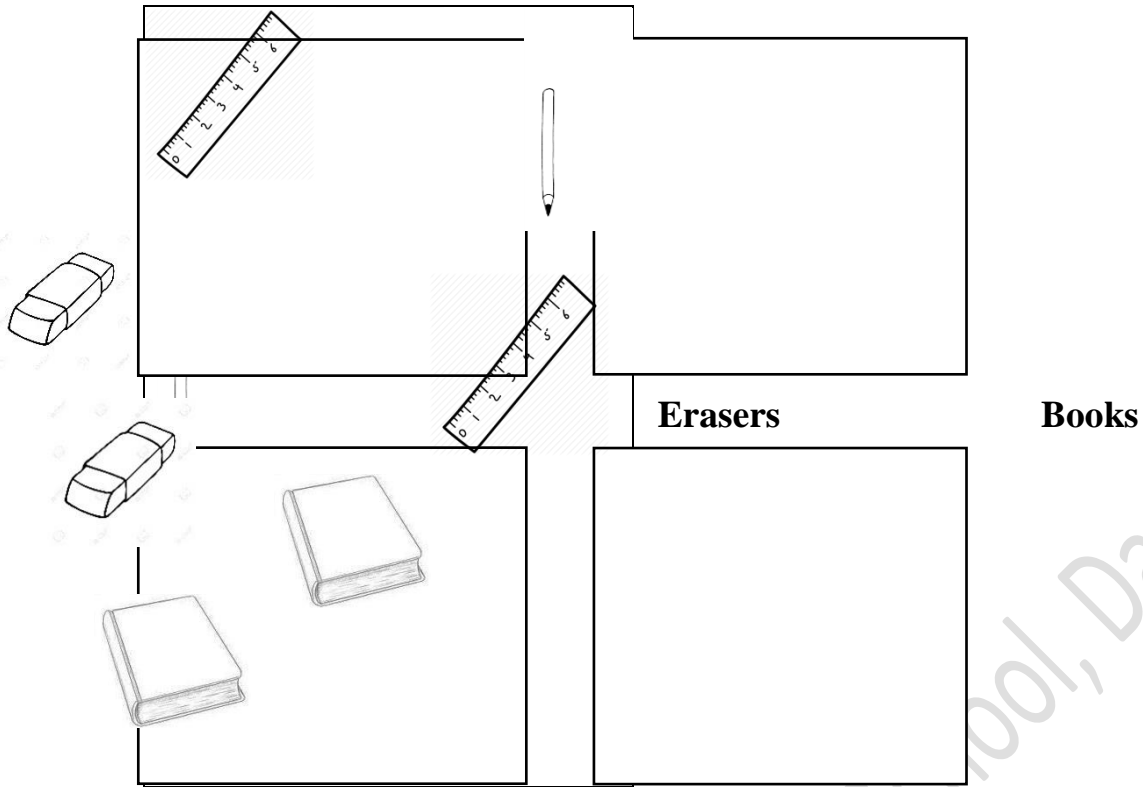


$$\underline{\hspace{2cm}} + \underline{\hspace{2cm}} = \boxed{\hspace{1cm}}$$

III. Organize Akhul's Stationary Shop .

Scales

Pencils



IV. How many days are there in a week? Name them.

There are _____ days are there in a week



Al Khozama International School, Dammam

(B. E. S. T. Schools, Saudi Arabia)

Class: 1

Worksheet

Subject: Hindi

Evaluation-3 (February 2019)

प्र- 1 सप्ताह के दिनों के नाम क्रमानुसार लिखिए :-

सोमवार , रविवार , शुक्रवार , मंगलवार , शनिवार , बुधवार , गुरुवार

→----- →----- →-----

प्र-2 नीचे दिए गए अंग्रेजी दिनों के नामों को हिन्दी में लिखिए :-

१) Tuesday - -----

४) Wednesday - -----

२) Friday - -----

५) Sunday - -----

३) Monday - -----

६) Thursday - -----



Al Khozama International School, Dammam

(B. E. S. T. Schools, Saudi Arabia)

Class: 1

Worksheet

Subject: Hindi

Evaluation-3 (February 2019)

प्र-1 नीचे दिए गए प्रश्नों के उत्तर लिखिए :-

1) " मेरा साथी" कहानी के पात्रों के नाम लिखिए I

उ-

2) " मेरा साथी" कहानी में किसको कार से टक्कर लगी ?

उ-

3) ब्राउनी को मेहुल के घर कौन छोड़कर गया ?

उ-

4) ब्राउनी की देखभाल किसने की ?

उ-

प्र - 2 नीचे दिए गए खाली स्थानों में सही शब्द चुनकर लिखिए :-

1. मेहुल अपने दोस्तों के साथ _____ चला गया I (खेलने / खाने)

2. दीपक अंकल _____ को मेहुल के घर छोड़ गए I (चीकू / ब्राऊनी)

3. मेहुल ब्राऊनी को _____ के पास लेकर गए I (डॉक्टर / टीचर)

प्र- 3 नीचे दिए गए अंग्रजी शब्दों के अर्थों को हिन्दी शब्दों से मिलाए I

Friend

शहर

Work

डबल-रोटी

City

देखभाल

Care

काम

Bread

साथी



Al Khozama International School, Dammam

(B. E. S. T. Schools, Saudi Arabia)









Class: 1

Worksheet

Subject: Hindi

Evaluation-3 (February 2019)

प्र-1 नीचे दिए गए चित्रों को पहचानकर सही नाम लिखिए :-



प्र-2 किसे क्या करना पसंद है ? चुनकर लिखिए I

मोर , खरगोश , बंदर , तितली

1. मुझे कलाबाज़ा खाना पसंद है I

2. मुझे पंख फैलाकर नाचना पसंद है I

3. मुझे गाजर खाना पसंद है I

4. मुझे बाग में उड़ना पसंद है I

5. मुझे पंख फैलाकर नाचना पसंद है I



Al Khozama International School, Dammam

(B. E. S. T. Schools, Saudi Arabia)

Class: 1

Worksheet

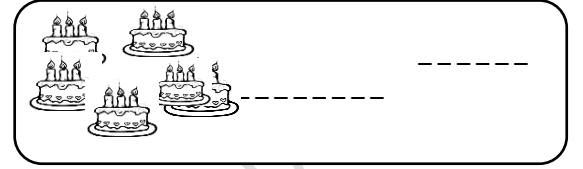

Subject: Hindi

Evaluation-3 (February 2019)

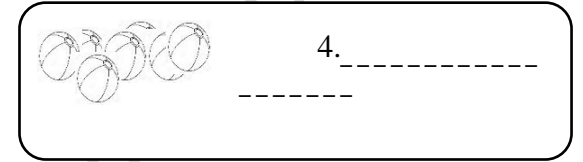
प्र-1 नीचे दिए गए चित्रों के सामने सही गिनती चुनकर लिखिए ।

(चार , दस , आठ , पाँच , एक , तीन , दो , छह , नौ , सात)

1.

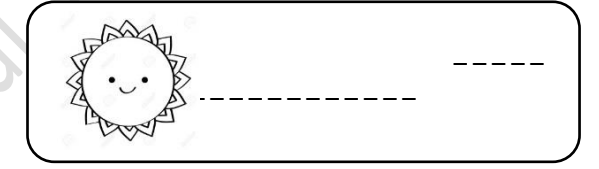


3.

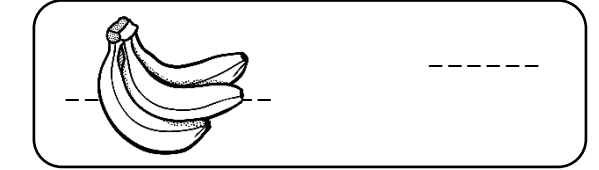



4.



5.



7.



9.



प्र-2 नीचे दिए गए अंको के सामने

हिन्दी की गिनती चुनकर लिखिए ।

(अठारह, बीस , ग्यारह , चौदह , बारह , तेरह , पंद्रह , उन्नीस , सोलह, सत्रह)

13	
20	
17	
11	
15	
12	
19	
14	
16	
18	