

AL KHOZAMA INTERNATIONAL SCHOOL, DAMMAM
B.E.S.T. Group of Schools, K.S.A.




Affiliated to CBSE – New Delhi, Affiliation No: 5730019

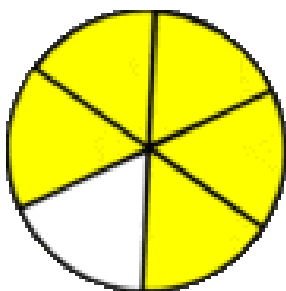
REVISIONWORKSHEET-1

GRADE:3 Mathematics(Block 21 &22)

1. Write a story problem using $45 \div 9 = \underline{\quad}$ and solve it.
2. Divide by expanding: $65 \div 5$
3. Divide using equal sharing. Find the remainder. $80 \div 7$
4. Divide by expanding: $44 \div 4$
5. Divide a. $98 \div 7$ b. $73 \div 8$
6. There are 20 raspberries. Divide them among 5 people. How many are in each group?
7. For $79 \div 9$, the value of Q and R is
8. A number that is to be divided by another is called _____.
9. The number we get after dividing one number by another is called _____.
10. The number that is left over after dividing is called _____.
11. A part of the whole is called _____.
12. One part out of three equal parts is called _____.
13. What fraction of the circle is pizza?



14. The number on top of the fraction is called _____.
15. The number at the bottom of the fraction is called _____.
16. What fraction of the circle is not shaded and what fraction of the circle is shaded?



17. What is special about a fraction when the numerator and denominator are the same?

18. Shade the following shapes according to the fraction given.

A. $\frac{3}{5}$



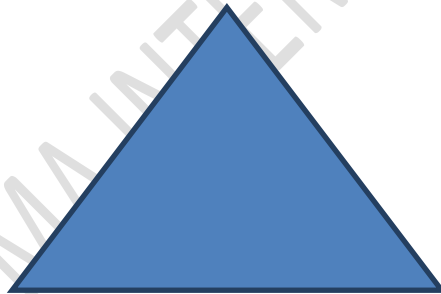
B. $\frac{3}{4}$




19. Raghav has 10 burgers. How can he divide them equally among friends so each gets a fair share?

20. Divide the picture into

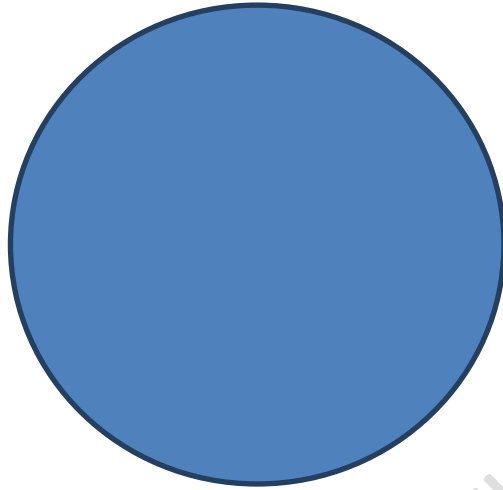
a. Halves



b. Fourths



c. Thirds



21. Which among the following statements is true?

- A) For a whole unit, one out of 4 equal parts of the whole is represented as $\frac{1}{4}$
- B) For a whole unit, three out of 8 equal parts is represented as $\frac{3}{8}$
- C) In a fraction, denominator is the number of parts, the whole is divided into.
- D) All the above