

# NEW AL WUROOD INTERNATIONAL SCHOOL, JEDDAH

(PEEVES SCHOOLS, K.S.A.)

Affiliated to CBSE – New Delhi



## EVALUATION - II (2016 - 2017)

Subject: Social Science

Invigilator's Signature

Date: 20.11.2016

Set: A

Time: 2 Hours

Class: V Sec: \_\_\_\_\_

Max. Marks: 50

Name: \_\_\_\_\_

Roll No. : \_\_\_\_\_

SECTION	A	B	C	D	TOTAL MARKS
MAX. MARKS					50
MARKS OBTAINED					
MARKS AFTER SCRUTINY					

Examiner's Signature

Scrutinizer's Signature

### Instructions to the Candidates:

1. Please check that this question paper contains all the printed pages.
2. All answers must be written in the space provided.
3. Write neatly and legibly.
4. Do not leave the examination hall without handing over the answer paper to the invigilator.

*Handwritten signature in blue ink.*

(3M)

**I. Fill in the blanks:**

1. A person using strong methods to bring about a change in the country is called \_\_\_\_\_.
2. To show something in a particular way is called \_\_\_\_\_.
3. Two lines crossing each other are called \_\_\_\_\_.
4. India has recognized the Local time of \_\_\_\_\_ Longitude as the Indian Standard time.
5. The title is an \_\_\_\_\_ of the map.
6. \_\_\_\_\_ was involved in a train robbery against the British.

(3M)

**II. Write True or False:**

1. Parallels are vertical lines. \_\_\_\_\_
2. Scale is an element of the map. \_\_\_\_\_
3. Chandrasekhar Azad raised the slogan "Inquilab Zindabad". \_\_\_\_\_
4. India was partitioned in 1950. \_\_\_\_\_
5. A physical map shows the river of a place. \_\_\_\_\_
6. The Prime meridian is used to calculate the temperature of a place. \_\_\_\_\_

III. Identify the following:

(3M)



1.

---



2.

---



3.

This is a royalty free image that can be used for your personal, corporate or education projects. It can not be resold or freely distributed. If you need an editable PowerPoint or Adobe Illustrator version of this map please visit [www.bjdesign.com](http://www.bjdesign.com) or [www.mapfordesign.com](http://www.mapfordesign.com). This text can be cropped off. © Copyright Bruce Jones Design Inc. 2010

What type of Map?


---

*Handwritten signature in blue ink.*



4.

\_\_\_\_\_



5.

\_\_\_\_\_



6.

\_\_\_\_\_

**IV. Name the Following:**

**(3 M)**

1. The longest parallel line, which cuts Globe into two equal halves: the Northern Hemisphere and Southern Hemisphere. \_\_\_\_\_

2. This tells us the distance between two places on a map. \_\_\_\_\_

3. Full form of INA. \_\_\_\_\_

4. "Give me blood, and I will give you freedom" was a slogan raised by \_\_\_\_\_.

5. The longitude which is drawn in a zigzag manner is. \_\_\_\_\_

6. The map showing the distribution of natural vegetation. \_\_\_\_\_

**V. Match the following:**

**(2M)**

- |                                |   |      |
|--------------------------------|---|------|
| 1. Jallianwala Bagh incident   | - | 1942 |
| 2. Non-Cooperation Movement    | - | 1930 |
| 3. Quit India Movement         | - | 1919 |
| 4. Civil Disobedience movement | - | 1920 |

**VI. Answer the following in 1-2 sentences:**

**(12x1=12M)**

1. Why was India partitioned in 1947?

---

---

---

2. Mention the names of few revolutionary freedom fighters.

---

---

3. What is the use of a Map?

---

---

---

4. Name the important Longitudes.

---

---

5. In the North pole, how did the people locate places?

---

---

---

6. Which are the countries, that celebrate Independence day on 15th August along with India?

---

---

7. How many time zones are there in Russia?

---

---

8. State the uses of a grid.

---

---

9. Define Meridian.

---

---

10. What are Ahimsa and Satyagraha?

---

---

---

11. Why did some people use violent methods of protest against the British?

---

---

---

12. Write a slogan to "Stop pollution".

**VII. Answer the following in four to five sentences:**

**(8x3=24M)**

1. Explain any three features of a map.

---

---

---

---


---

---

---

---

2. Draw the important latitudes.



3. "Indian Independence came with many sacrifices" Support this statement with reasons.

---

---

---

---

---

---

---

---

4. Write the similarities and differences between a map and a globe.

---

---

---

---

---

---

---

---

5. Based on the freedom fighters, who do you think was the bravest and why?

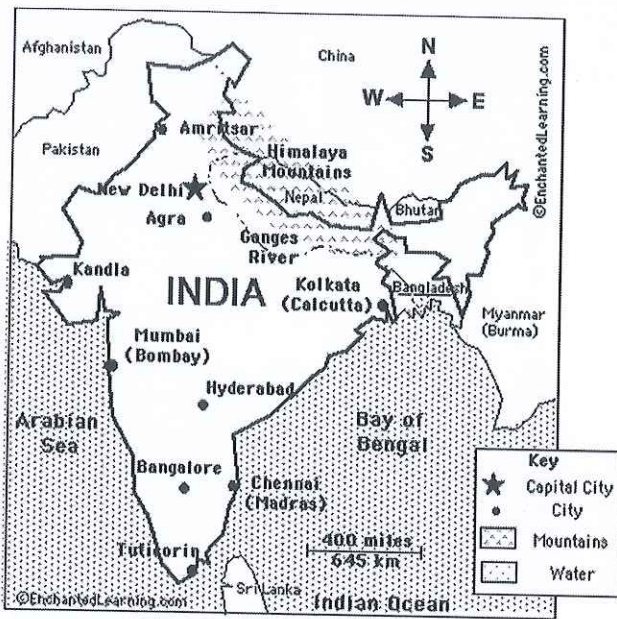
*PM*



6. What are the significance of the Arctic Circle and Antarctic Circle?

7. Mention any three different phases of India's freedom struggle during 200 years of the British rule.

8. How many types of map can we create using the map given below? Write one feature for each type of map.



PNL 5