

AL KHOZAMA INTERNATIONAL SCHOOL, DAMMAM



B.E.S.T. Group of Schools, K.S.A.

Affiliated to CBSE – New Delhi, Affiliation No: 5730019

EVA-2 :2021-2022

WORKSHEET-2

GRADE:4

SUBJECT: MATHEMATICS

FILL IN THE BLANKS:

1. 6:49 can be written as ----- minutes to 7.
2. 360 seconds = ----minutes.
3. 8 weeks = ---days.
4. The short hand of a clock is called as -----hand.
5. Rupee 1 = ---paise
6. A ---- is a list of items & the price to be paid for each item.
7. Fractions with the same denominators are called -----
8. It takes --- hours for the hour hand to complete one full round of the clock.
9. Circle charts are also called -----
10. It takes --- minutes for the minute hand to go around the clock once.

SOLVE:





11. Sonu bought a dress for Rs 799.99, a bracelet for Rs 235.65 & a pen for Rs 53.75. What is the total amount she spent ?
12. Raju ate $\frac{3}{5}$ of pizza & Pintu ate $\frac{1}{5}$ of pizza. Who ate more & by how much ?
13. Lal has one note of each Rs 1000, Rs 500, Rs 100, Rs 50 & Rs 10 . He also has one coin of each of Rs 5, Rs 2 & Re 1. What amount in total he has ?
14. The price of 1 bag is Rs 54. How much money should I pay for 6 such pens?
15. Convert the given time to 24-hours clock time:
a) 7:30 am b) 12:40 am c) 4:27 pm

16. The following data shows the flavor of ice-cream sold in an ice-cream parlor.

Strawberry, Chocolate, Vanilla, Strawberry, Vanilla, Mango, Orange, Chocolate, Mango, Mango, Vanilla, Chocolate, Vanilla, Mango, Strawberry, Mango, Vanilla, Orange, Orange, Vanilla, Vanilla, Mango, Chocolate, Orange, Vanilla, Mango, Orange

Prepare a tally chart for the given data:

17. The following pictograph shows the number of toys in a toy shop.

TOYS	NUMBER
DOLLS	
TEDDY BEARS	
CARS	
AEROPLANES	

Each  = 2 toys.

- How many toys are there in total?
- How many more dolls than cars are there ?
- If the cost of 1 car is Rs 65, find the cost of all cars in the shop.

18. Harsh sleeps at 10:20 pm & gets up next morning after 8 hours 10 minutes.

At what time did he get up ?

19. If 8 children went to see the book fair & spent Rs 480 to buy the tickets.

How much did one ticket cost ?

20. To make a recipe of cake, Sahni used $\frac{1}{10}$ kg of sugar, $\frac{2}{10}$ kg of wheat flour & $\frac{3}{10}$ kg of butter. What was the total weight of things she used ?

21. Write the simplest form of $\frac{9}{12}$.
