



AL KHOZAMA INTERNATIONAL SCHOOL DAMMAM
B.E.S.T. Group of Schools, K.S.A.
Affiliated to CBSE – New Delhi, Affiliation No: 5730019

Subject: MATHEMATICS


Class-1

WORKSHEET - 2

Q1. Write the total amount?



Q2. Draw coins of Rs 2 and Rs 5



Q3. Put the activities in correct order in which they are done.

A. Cooking vegetable

B. Buying vegetables

C. Eating vegetable for dinner



D. Cutting vegetables

Q4. Write the missing days.

Sunday		Wednesday		Friday
--------	--	-----------	--	--------

Q5. How many Rs 5 do you need to make Rs 20?

Ans- _____

Q6. Sonu has two  5 coins and two  10 coins. What is the total amount that Sonu has?

Ans- _____

Q7. Write the missing months.

January		March		May	
---------	--	-------	--	-----	--

Q8. What is the total value?



Q9. What notes or coins will you use to pay for the given things.



A. Rs 4 _____



B. Rs 10 _____

Q10. Name 2 activities that takes more time.

Ans- _____

Q11. How much change will I get back if I buy a book for Rs 19 and give the shopkeeper a Rs 20 note?

Ans- _____

Q12. Show 2 different methods to pay the item.



Rs 25

--	--
