

AL KHOZAMA INTERNATIONAL SCHOOL, DAMMAM
(PEEVES SCHOOLS, K.S.A.)
Affiliated to CBSE – New Delhi



WORKSHEET
EVALUATION - II (MARCH '21)

Subject: Social Science (Blocks-13, 17, 19)

Date: 15 /02/21

Class: III Sec: _____

Name: _____

Roll No.: _____

I. Fill in the blanks

1. The _____ is flat at the poles.
2. _____ is important for all living things.
3. A _____ is a flat land but it is a raised piece of land.
4. _____ proved that the Earth is round.
5. _____ is covered with snow for most part of the year
6. Flowing bodies of water are also called _____.
7. A _____ is an object that goes around the planet.
8. Kerala is famous for _____

II. State True or False

9. The North Pole is at the bottom of the Earth- _____
10. Earth has a bulge around its centre- _____
11. Some cars also use the solar energy to run- _____
12. Hills are bigger than mountains- _____
13. The Moon is a huge ball of hot gases- _____
14. A valley is a low land between mountains or hills- _____
15. Stars are huge balls of gases- _____

16. Charminar is a monument that is located at the centre of Mumbai city-

III. Match the following

17. Spherical shape	Manipur ()
18. Ocean and Sea	Space traveller ()
19. Hot Desert	Good for plants ()
20. Astronaut	Salt water ()
21. Fertile soil	Himachal pradesh ()
22. Loktak Lake	Covered with sand ()
23. Pahari painting	Globe ()

IV. Name the following

(1 x 5 = 5)

24. A small fresh water body surrounded by land on four sides.

25. Many hills joined to form . _____

26. Different land forms and water bodies of Earth together are called.

27. Our nearest star. _____

28. The natural satellite of Earth. _____

29. A line decided by the government to divide states and countries -


30. Language spoken by the people of Maharashtra - _____

31. A state that is located in the Himalayas - _____

32. Capital city of Kerala State- _____

v. Identify the images and write 2 facts about it


33. _____



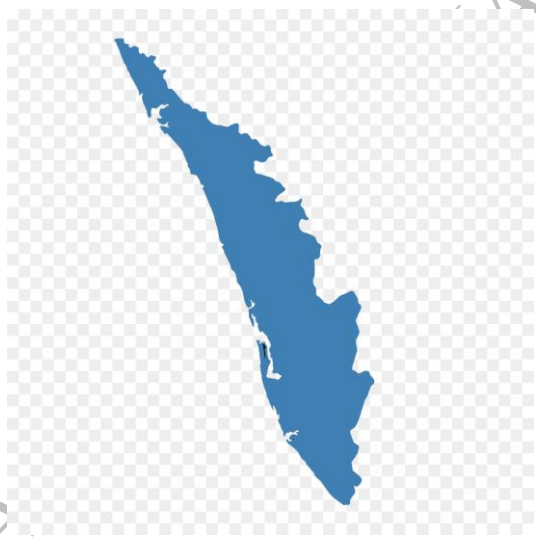
34. _____



35. _____



36. _____



37. _____



38. _____



39. _____



40.



AL KHOZAMA INTERNATIONAL SCHOOL