

NEW AL WUROOD INTERNATIONAL SCHOOL, JEDDAH  
(PEEVES SCHOOLS, K.S.A.)  
Affiliated to CBSE – New Delhi



EVALUATION - 3 (2016 – 2017)

Subject: E.V.S.

Invigilator's Signature

Set: A

Date: 08-03-2017

Time: 2 Hours

Class: II Sec: \_\_\_\_\_

Max. Marks: 50

Name: \_\_\_\_\_

Roll No. : \_\_\_\_\_

SECTION	A	B	C	D	TOTAL MARKS
MAX.MARKS					
MARKS OBTAINED					
MARKS AFTER SCRUTINY					

Examiner's Signature

Scrutinizer's Signature

**Instructions to the Candidates:**

1. Please check that this question paper contains all the printed pages.
2. All answers must be written in the space provided.
3. Write neatly and legibly.
4. Do not leave the examination hall without handing over the answer paper to the invigilator.

**I. Choose the correct answer**

**5x1=5 Marks**

1. Breathing unclean air can make us sick and affect our \_\_\_\_\_ .  
a. lungs                      b. eyes                      c. brain
2. Wood \_\_\_\_\_ in water.  
a. sink                      b. float                      c. swim
3. When water vapour cools down it changes into tiny drops of \_\_\_\_\_ .  
a. ice                      b. water                      c. steam
4. We should save \_\_\_\_\_ .  
a. cars                      b. house                      c. electricity
5. To move something away from one self is called \_\_\_\_\_ .  
a. push                      b.action                      c. run

**II. Fill in the blanks**

**5x1=5 Marks**

**Sink, plants, directions, warm, forest**

1. Push, pull changes the speed and \_\_\_\_\_ to move things.
2. Metal \_\_\_\_\_ in water.
3. Wood keeps the house \_\_\_\_\_ .
4. \_\_\_\_\_ is a home of animals .
5. \_\_\_\_\_ need water to grow.

**III. Write True or false for the following statements**

**5x1=5 Marks**

1. We drink sea water. ( )
2. Planting trees does not reduce the air pollution. ( )
3. Moving air can push our clothes. ( )
4. Metal can cut easily. ( )
5. Things we get from nature is called natural resources. ( )

**IV. Answer the following in one word**

**2x2=4 Marks**

1. Which force will you use to do the following?
  - a. Kick a ball far off \_\_\_\_\_.
  - b. Drawing water out of well \_\_\_\_\_.
2. Give two examples where you can only pull to make something move.

Ans: a. \_\_\_\_\_  
b. \_\_\_\_\_

**V. Draw colour and label three forms of water**

**3x2=6 Marks**

--	--	--


VI. Match the following.

5x1=5 Marks

A.

(a) Pushing the box


( )



B.

(b) It is hard and made up of wood


( )



C.

(c) Rolling or pushing and pulling


( )



D.

(d) Stretching or pulling

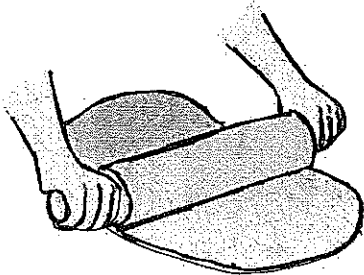
( )



E.

(e) It is hard and made up of metal

( )



**VII. Answer the following.**

**4×3=12 Marks**

1. Matchstick and pencil are made up wood. How are they different in their feature?

Ans: \_\_\_\_\_  
\_\_\_\_\_  
\_\_\_\_\_

2. Why do we need to save trees?

Ans: \_\_\_\_\_  
\_\_\_\_\_  
\_\_\_\_\_

3. Name six things we get from the forest.

Ans: \_\_\_\_\_  
\_\_\_\_\_  
\_\_\_\_\_


4. Give three ways by which we can help in keeping the air clean.

Ans: \_\_\_\_\_  
\_\_\_\_\_  
\_\_\_\_\_

VIII. Label and colour the picture of water cycle.

5 Marks

river, water vapor, rain, tiny drops of water, snow, heavy clouds



IX. Sort the things into two groups.

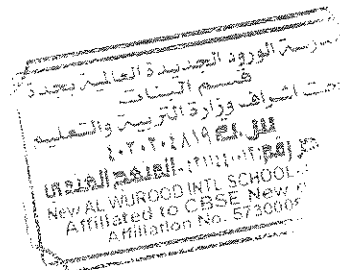
3 Marks

Paper, nail, chair, gold chain, bed, bridge, table, pin, pencil,  
iron rod, fan, door

Wood

Metal

Wood	Metal



Farha Yameen

yk  
19/2/17

56.