



Affiliated to CBSE – New Delhi

EVALUATION-3, 2017-18


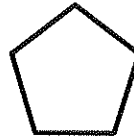
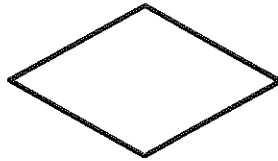

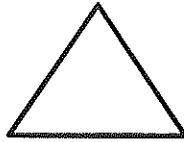

REVISION WORK SHEET -2{BL 22,23,24}

SUBJECT: M A T H E M A T I C S
GRADE-1

Name : _____

Date : _____

Q.1. Colour the squares in red and rectangles in blue.



Q.2. Write the names of the month.


Q.3 Name two activities that you do on Monday.

A. _____




B. _____

Q.4. Draw the pattern that comes next.


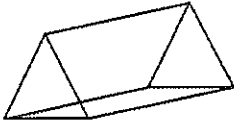



B.  _____

Q.5 Complete the table.

Shape	Number of Sides	Number of corners
		
		
		

Q.6. Will this object roll or slide and why?

Solid shape	Roll/ Slide	Why
		
		
		

Q.7. Skip count by 5. Colour the numbers.

1	2	3	4	5	6	7	8	9	10
11	12	13	14	15	16	17	18	19	20

Q.8. Write the numbers that comes next.

A. 10 , 12 , 14 , 16 , _____, _____, _____, _____, _____

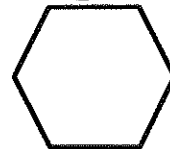
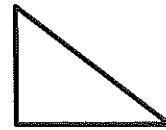
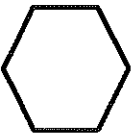
B. 15, 20 , 25 ,30 , _____, _____, _____, _____, _____

Q.9. Fill in the missing months of the year.

A. October _____ December _____ February

B. March _____, _____, June.

Q.10. Match the shapes.

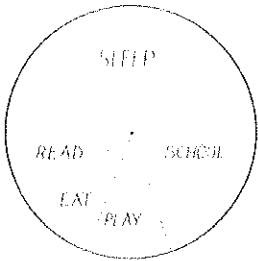


Q.11 Create your own pattern using ABC (12 letters long)

Q.12. Fill in the blanks.

- A. How many months are there in a year? _____.
- B. If today is Thursday what was yesterday? _____.
- C. How many days in a week? _____.
- D. Which month comes before September? _____
- E. Which day comes between Sunday and Tuesday? _____.
- F. Which month comes between May and July? _____.

Q.13. Name three activities that take less time.



- A. _____
- B. _____
- C. _____

Q.14. Write the days of the week.

--	--	--	--	--	--	--

Q.16. Write the time of the activity: (Morning, Afternoon, Evening and Night).

- A. Sleep _____
- B. Lunch _____

C. Study _____

D. School _____

E. Dinner _____

F. Play _____

Q.17. Draw two shapes with four sides and four corners.

--	--

مدرسة الورود الجديدة الخاصة
قسم البنات
تحت إشراف وزارة التربية والتعليم
٢٠١٩
New Al WUROOD INTL SCHOOL JEDDAH
Affiliated to CHSE plate detm
Affiliation No. ST00069

Checked
[Signature]